

Year 1 Spring 1 Maths Activity Mat 4


Section 1

18 is 11 lower than what number?



Section 2

What time is on the clock?



Section 3

Add the coins.



Section 4


What is the underlined digit worth?

48

Section 5

Draw 8 more flowers.

How many flowers do you have altogether?




Section 6

If $17 = 10 + 7$, what is 46 ?

Section 7

Tick the second largest bear.



Section 8

$$12 + \boxed{} = 25$$

